



INDIAN SCHOOL AL WADI AL KABIR
DEPARTMENT OF MATHEMATICS (2023 – 2024)
CLASS:-I






TOPIC: MONEY

WORKSHEET - 1

RESOURCE PERSON: SABINA.D

NAME: _____ SEC: _____ DATE: _____

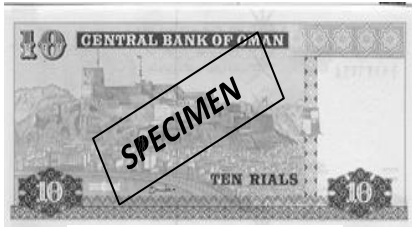
Q1. Match the following coins and paper currency to their amount:

1.		a.	10 Rials
2.		b.	100 Baisa
3.		c.	1 Rial
4.		d.	1/2 Rial
5.		e.	50 Baisa


Answers: 1. _____, 2. _____, 3. _____, 4. _____, 5. _____.





Q2. Help Reena to identify the currency and write the correct price on the tag given below each item.




SPECIMEN



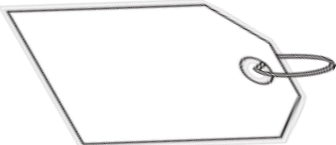
SPECIMEN



SPECIMEN



SPECIMEN



SPECIMEN



SPECIMEN

